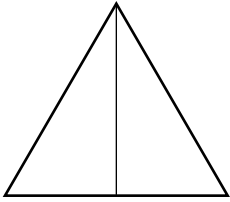
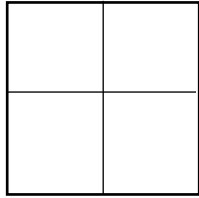


## Fișă de lucru Frații


1. Colorează în figurile geometrice de mai jos atâtea părți cât indică fracția dată:



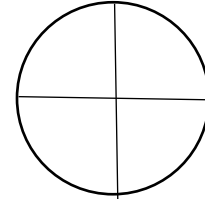
$$\frac{1}{2}$$



$$\frac{1}{4}$$



$$\frac{3}{4}$$



$$\frac{2}{4}$$

2. Scrie fracția potrivită părții colorate:



—




—



—



—

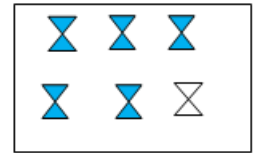

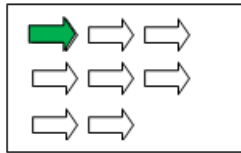



—



—

3. Unește părțile colorate din desene cu fracțiile corespunzătoare:



$$\frac{4}{6}$$

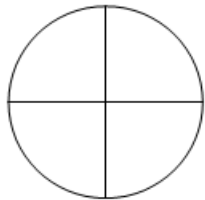
$$\frac{2}{3}$$

$$\frac{3}{5}$$

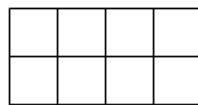
$$\frac{1}{8}$$

$$\frac{5}{6}$$


4. Colorează în figurile date cât indică fiecare cuvânt:




o pătrime



jumătate

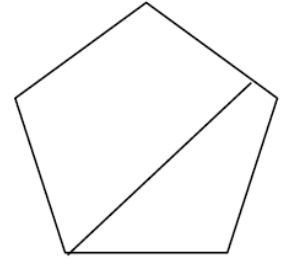
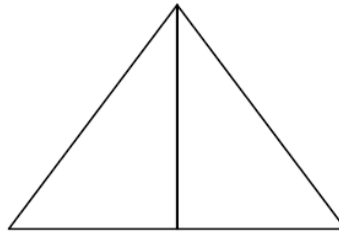
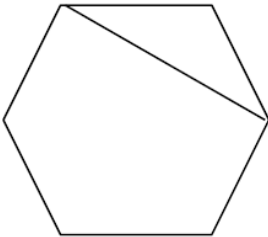
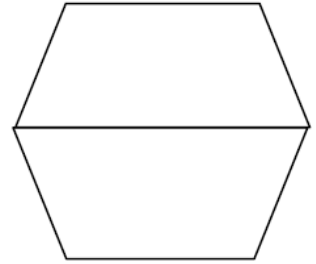




o doime



un sfert

5. Colorează jumătate din fiecare formă care arată două părți egale:



6. Sara vrea să coloreze o treime din stelute. Câte stelute ar trebui să coloreze?



Răspuns: \_\_\_\_\_

7. Câte pătrimi vei obține din merele de mai jos ?



Răspuns : \_\_\_\_\_